



# Wie viel sind die Zwillinge zusammen?



Zwillinge

1.

3 ? 3

4 8 10 6

1.

3 ? 3

6 10 2 8

1.

1 ? 1

8 2 4 10

1.

3 ? 3

2 6 10 8

1.

4 ? 4

10 4 6 8

1.

4 ? 4

10 6 2 8

1.

1 ? 1

2 8 10 4

1.

5 ? 5

8 10 6 2

1.

1 ? 1

10 8 6 2

1.

5 ? 5

2 10 8 6

1.

2 ? 2

4 2 8 10

1.

5 ? 5

10 2 4 8

1.

1 ? 1

6 10 8 2

1.


3 ? 3


6 4 2 8


1.


5 ? 5


10 8 6 2


1.   
 4  8  10  6


2.   
 6  10  2  8


3.   
 8  2  4  10


4.   
 2  6  10  8


5.   
 10  4  6  8


6.   
 10  6  2  8


7.   
 2  8  10  4


8.   
 8  10  6  2


9.   
 10  8  6  2


10.   
 2  10  8  6

11.   
 4  2  8  10

12.   
 10  2  4  8

13.   
 6  10  8  2

14.   
 6  4  2  8

15.   
 10  8  6  2