



Wie viel sind die Zwillinge zusammen?



Zwillinge

1.

10 6 8 4

1.

2 8 6 4

1.

4 10 2 8

1.

10 8 6 2

1.

6 4 10 2

1.

2 6 10 8

1.

10 4 8 6

1.

2 6 10 8

1.

4 10 2 8

1.

2 10 6 8

1.

4 10 2 8

1.

8 6 4 10

1.


8 6 2 4


1.


10 2 6 8


1.


6 10 4 8


1. 
 10 6 8 4


2. 
 2 8 6 4


3. 
 4 10 2 8


4. 
 10 8 6 2


5. 
 6 4 10 2


6. 
 2 6 10 8


7. 
 10 4 8 6


8. 
 2 6 10 8


9. 
 4 10 2 8


10. 
 2 10 6 8

11. 
 4 10 2 8

12. 
 8 6 4 10

13. 
 8 6 2 4

14. 
 10 2 6 8

15. 
 6 10 4 8