




# Berechne die Zwillingaufgaben bis 20

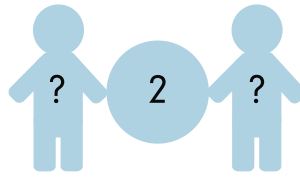


Zwillinge


1.



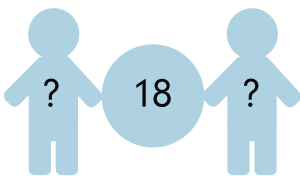
2.



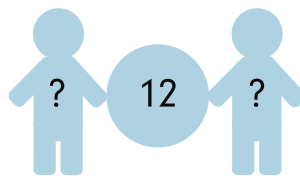
3.




4.



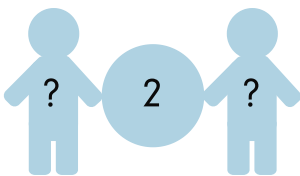
5.




6.




7.




8.



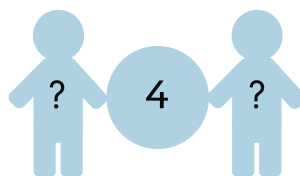
9.




10.



11.



12.



1.

4 2 8 6

2.

6 1 4 8

3.

5 10 3 1

4.

3 9 1 10

5.

3 7 6 1

6.

6 10 8 4

7.

10 1 3 7

8.

3 4 5 6

9.

7 10 9 1

10.

1 8 2 6

11.

8 1 6 2

12.

2 4 9 3