





Welche Zahl gehört auf das Blatt?




Rechenblumen




- 7 8 6 5




- 9 10 11 8




- 4 1 2 3



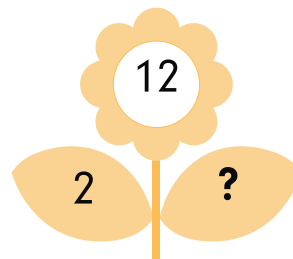
- 10 11 12 13




- 12 11 9 10




- 7 6 8 9



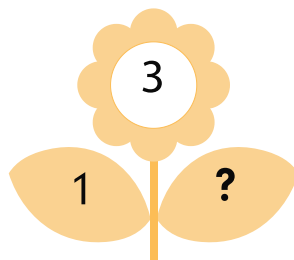
- 12 10 11 13




- 2 4 1 3




- 4 6 5 3




- 3 2 4 5




- 8 9 11 10




- 8 6 5 7




- 7 8 6 **5**



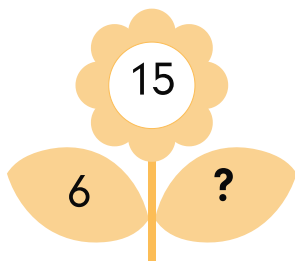
- 9 10 11 **8**




- 4 **1** 2 3




- 10** 11 12 13



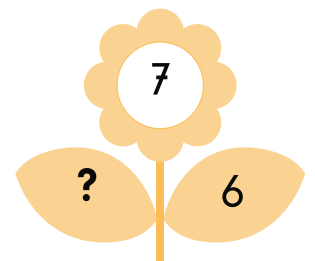
- 12 11 **9** 10



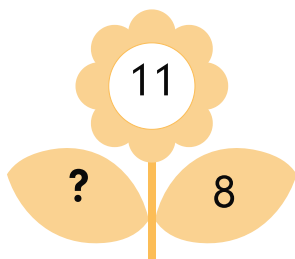
- 7 **6** 8 9




- 12 **10** 11 13




- 2 4 **1** 3




- 4 6 5 **3**



- 3 **2** 4 5



- 8** 9 11 10



- 8 6 **5** 7