

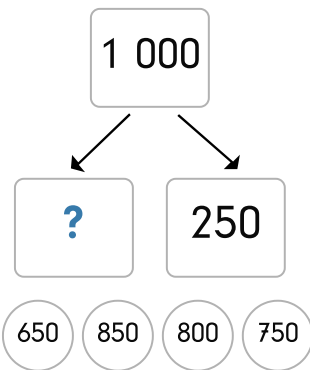


1 000 zerlegen

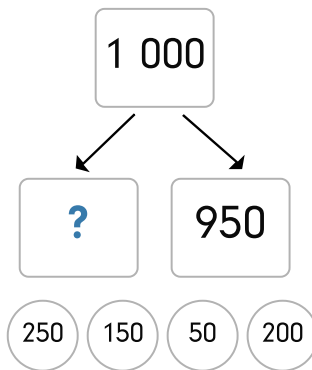


Zahlzerlegungen

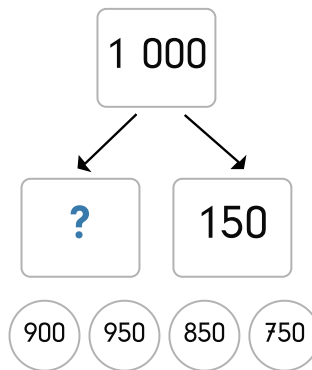
1.



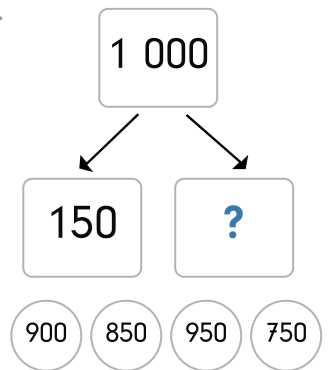
2.



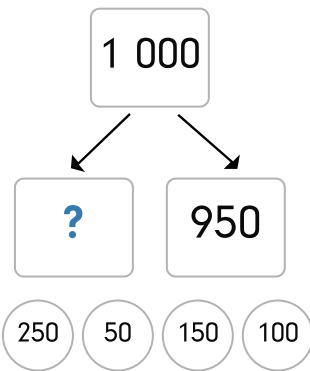
3.



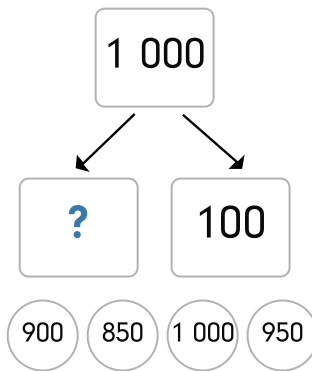
4.



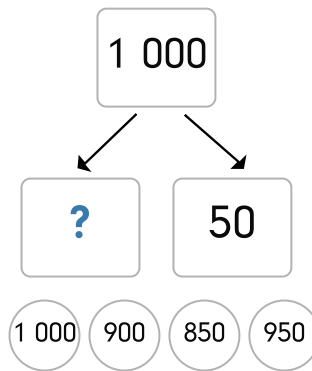
5.



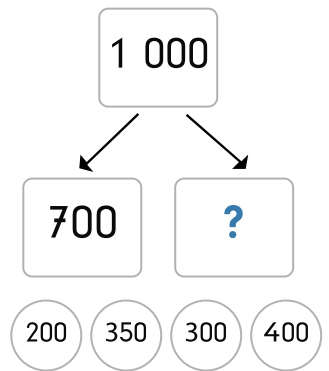
6.



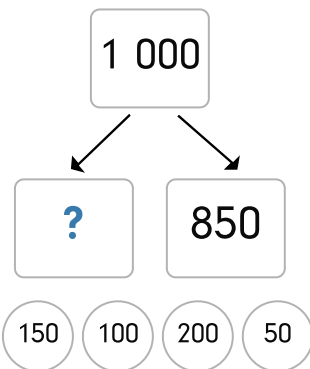
7.



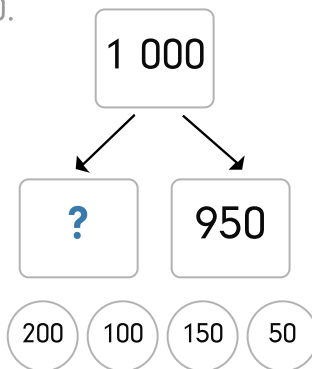
8.



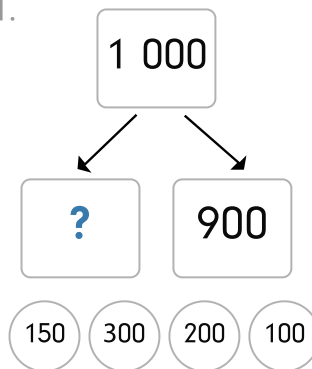
9.



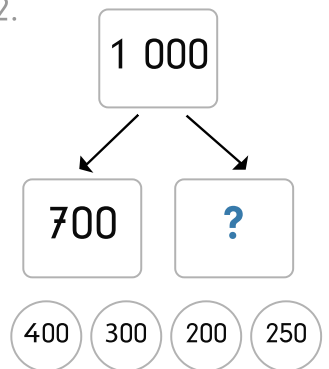
10.



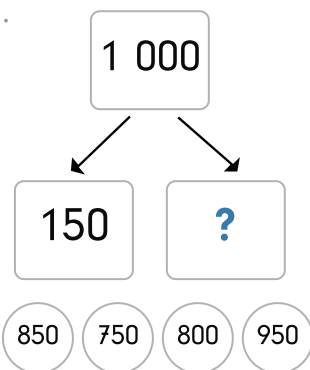
11.



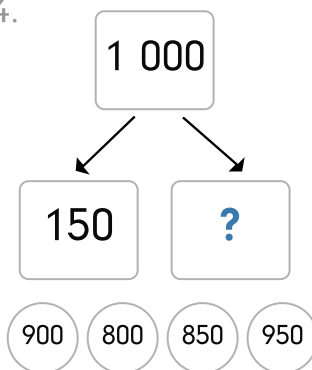
12.



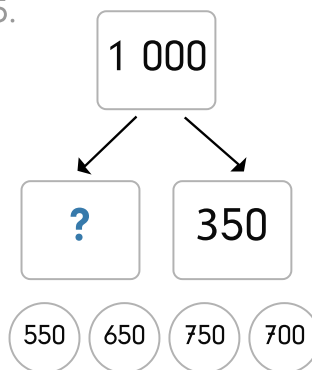
13.



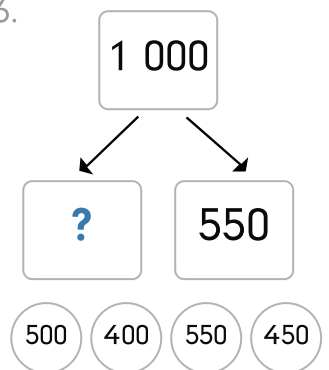
14.



15.



16.





1. $1\ 000$ splits into $?$ and 250 . Options: 650, 850, 800, **750**.
2. $1\ 000$ splits into $?$ and 950 . Options: 250, 150, **50**, 200.
3. $1\ 000$ splits into $?$ and 150 . Options: 900, 950, **850**, 750.
4. $1\ 000$ splits into 150 and $?$. Options: 900, **850**, 950, 750.
5. $1\ 000$ splits into $?$ and 950 . Options: 250, **50**, 150, 100.
6. $1\ 000$ splits into $?$ and 100 . Options: **900**, 850, 1 000, 950.
7. $1\ 000$ splits into $?$ and 50 . Options: 1 000, 900, 850, **950**.
8. $1\ 000$ splits into 700 and $?$. Options: 200, 350, **300**, 400.
9. $1\ 000$ splits into $?$ and 850 . Options: **150**, 100, 200, 50.
10. $1\ 000$ splits into $?$ and 950 . Options: 200, 100, 150, **50**.
11. $1\ 000$ splits into $?$ and 900 . Options: 150, 300, 200, **100**.
12. $1\ 000$ splits into 700 and $?$. Options: 400, **300**, 200, 250.
13. $1\ 000$ splits into 150 and $?$. Options: **850**, 750, 800, 950.
14. $1\ 000$ splits into 150 and $?$. Options: 900, 800, **850**, 950.
15. $1\ 000$ splits into $?$ and 350 . Options: 550, **650**, 750, 700.
16. $1\ 000$ splits into $?$ and 550 . Options: 500, 400, 550, **450**.