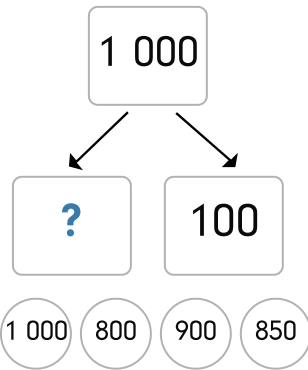
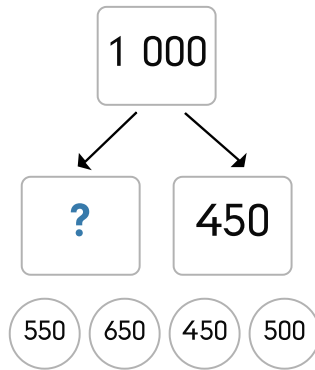




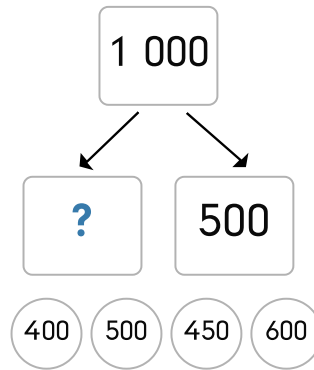
1.



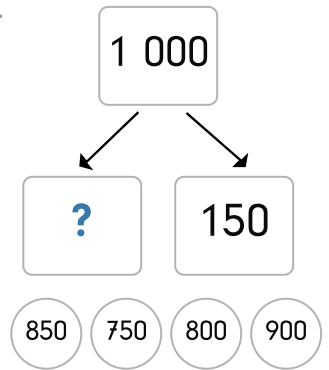
2.



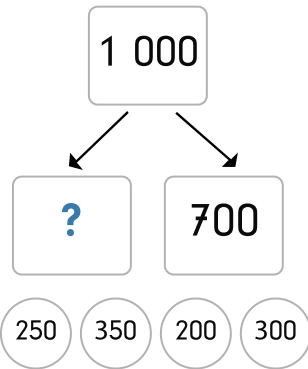
3.



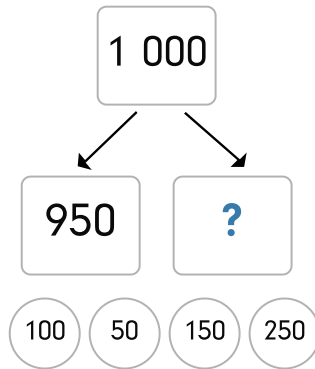
4.



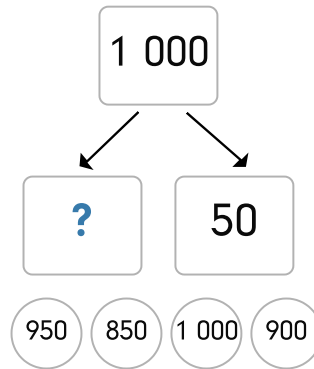
5.



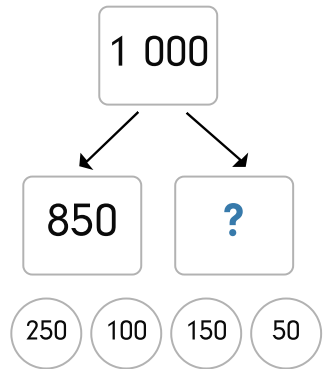
6.



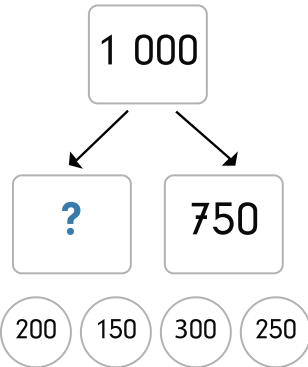
7.



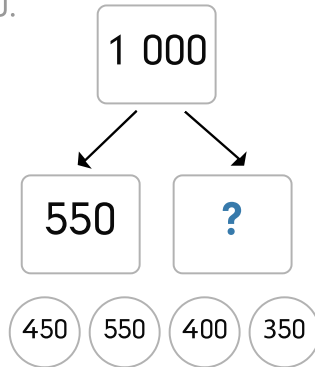
8.



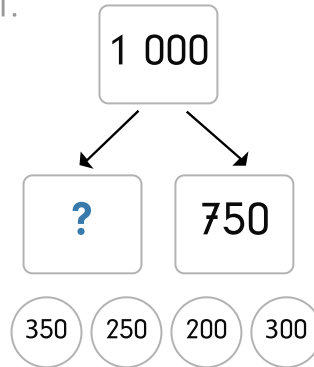
9.



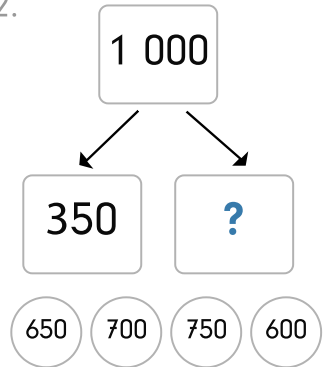
10.



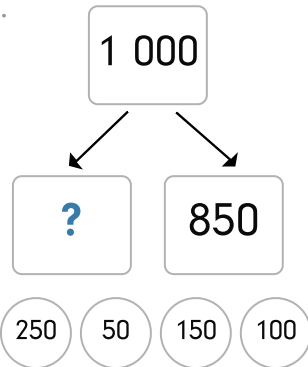
11.



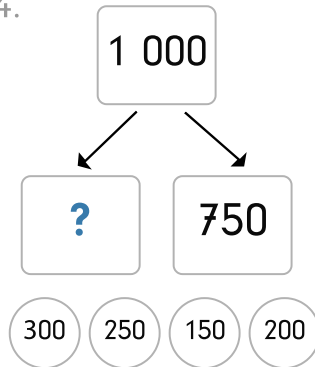
12.



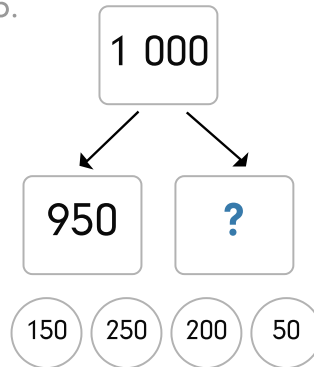
13.



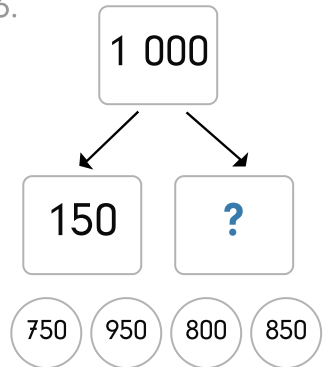
14.



15.



16.





1. $1\ 000$ splits into $?$ and 100 . Options: $1\ 000$, 800 , 900 , 850 . Answer: 900 .

2. $1\ 000$ splits into $?$ and 450 . Options: 550 , 650 , 450 , 500 . Answer: 550 .

3. $1\ 000$ splits into $?$ and 500 . Options: 400 , 500 , 450 , 600 . Answer: 500 .

4. $1\ 000$ splits into $?$ and 150 . Options: 850 , 750 , 800 , 900 . Answer: 850 .

5. $1\ 000$ splits into $?$ and 700 . Options: 250 , 350 , 200 , 300 . Answer: 300 .

6. $1\ 000$ splits into 950 and $?$. Options: 100 , 50 , 150 , 250 . Answer: 50 .

7. $1\ 000$ splits into $?$ and 50 . Options: 950 , 850 , $1\ 000$, 900 . Answer: 950 .

8. $1\ 000$ splits into 850 and $?$. Options: 250 , 100 , 150 , 50 . Answer: 150 .

9. $1\ 000$ splits into $?$ and 750 . Options: 200 , 150 , 300 , 250 . Answer: 250 .

10. $1\ 000$ splits into 550 and $?$. Options: 450 , 550 , 400 , 350 . Answer: 450 .

11. $1\ 000$ splits into $?$ and 750 . Options: 350 , 250 , 200 , 300 . Answer: 250 .

12. $1\ 000$ splits into 350 and $?$. Options: 650 , 700 , 750 , 600 . Answer: 650 .

13. $1\ 000$ splits into $?$ and 850 . Options: 250 , 50 , 150 , 100 . Answer: 150 .

14. $1\ 000$ splits into $?$ and 750 . Options: 300 , 250 , 150 , 200 . Answer: 250 .

15. $1\ 000$ splits into 950 and $?$. Options: 150 , 250 , 200 , 50 . Answer: 50 .

16. $1\ 000$ splits into 150 and $?$. Options: 750 , 950 , 800 , 850 . Answer: 850 .