

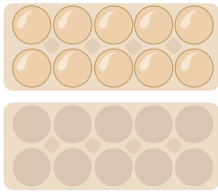


Wie viele Eier zählst du?



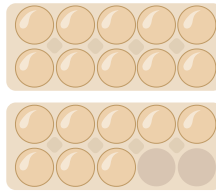
Mengen

1.




6 8 13 10

2.



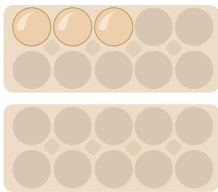
2 12 18 9

3.




0 8 7 14

4.



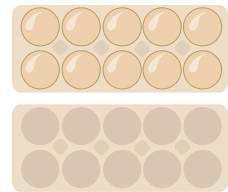
11 8 18 3

5.



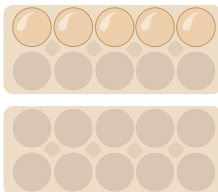
17 15 0 16

6.




12 0 5 10

7.



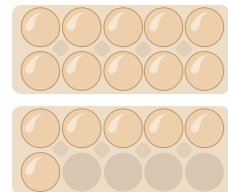
11 5 4 1

8.



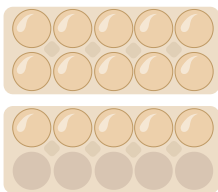
3 4 20 1

9.



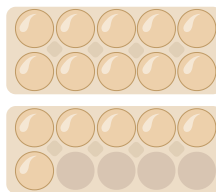
16 1 11 2

10.



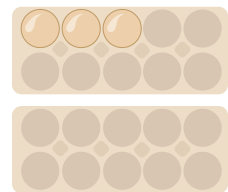
7 15 10 20

11.



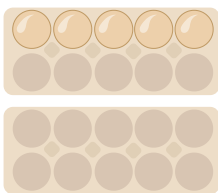
2 15 3 16

12.



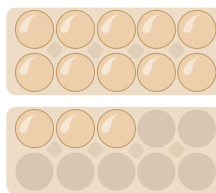
3 12 8 20

13.



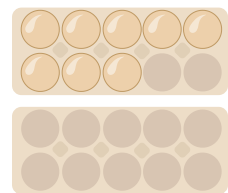
9 20 5 15

14.



12 17 13 15

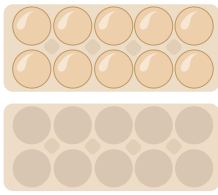
15.



20 14 8 5

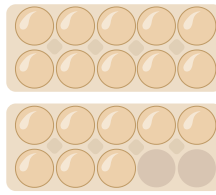


1.




6 8 13 **10**

2.



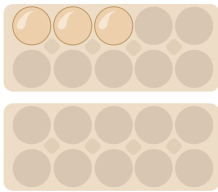
2 12 **18** 9

3.




0 8 7 14

4.



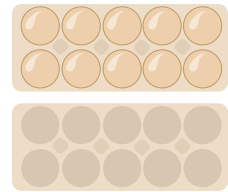
11 8 18 **3**

5.



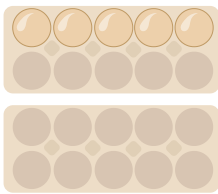
17 15 **0** 16

6.



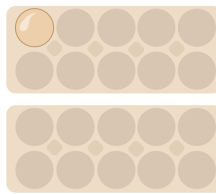
12 0 5 **10**

7.



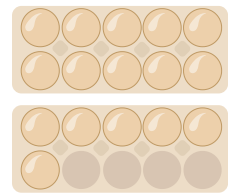
11 **5** 4 1

8.



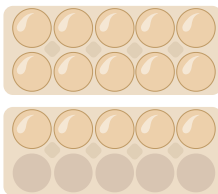
3 4 20 **1**

9.



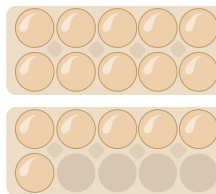
16 1 11 2

10.



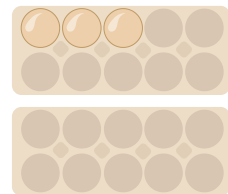
7 **15** 10 20

11.



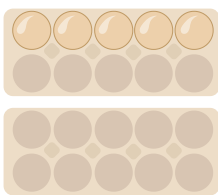
2 15 3 **16**

12.



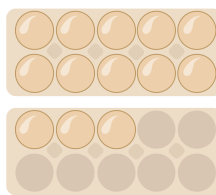
3 12 8 20

13.



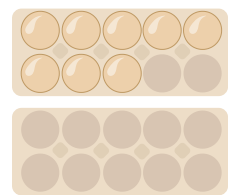
9 20 **5** 15

14.



12 17 **13** 15

15.



20 14 **8** 5