

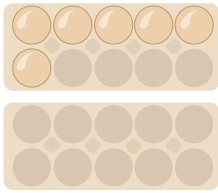


Wie viele Eier zählst du?



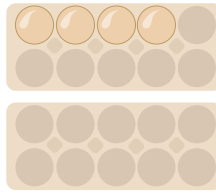
Mengen

1.



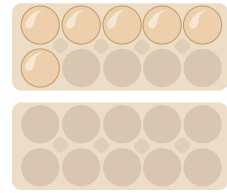
16 17 15 6

2.



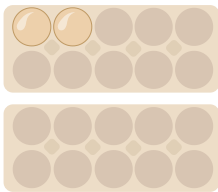
0 6 4 3

3.



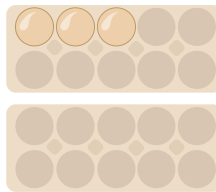
18 11 1 6

4.



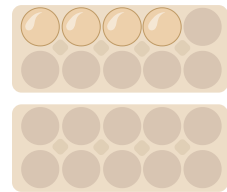
11 2 7 0

5.



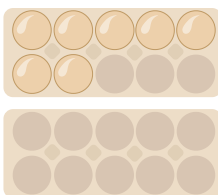
10 5 16 3

6.



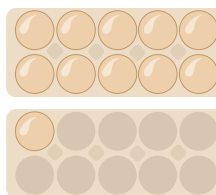
10 8 9 4

7.



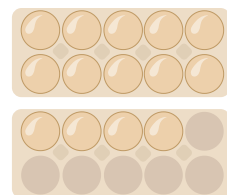
14 20 7 6

8.



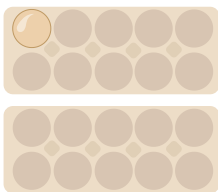
12 6 11 14

9.




15 8 14 20

10.



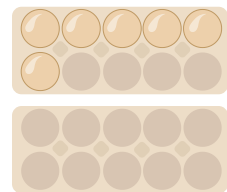
1 8 3 2

11.




19 0 3 11

12.



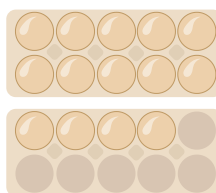
12 17 6 20

13.



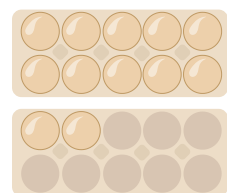
0 17 9 16

14.



2 8 14 11

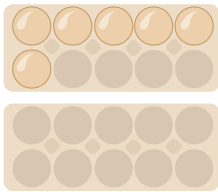
15.



14 12 3 5

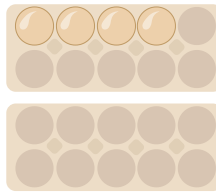


1.



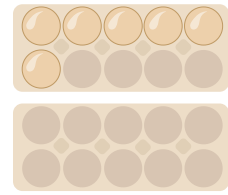
16 17 15 **6**

2.



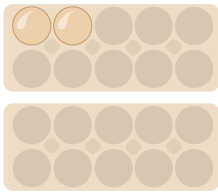
0 6 **4** 3

3.



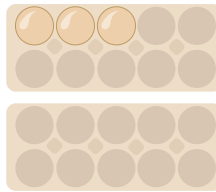
18 11 1 **6**

4.



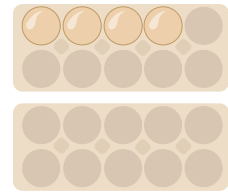
11 **2** 7 0

5.



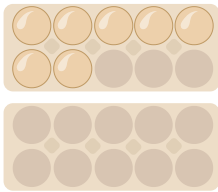
10 5 16 **3**

6.



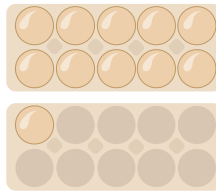
10 8 9 **4**

7.



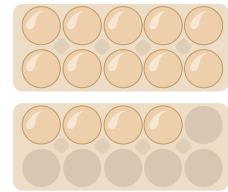
14 20 **7** 6

8.



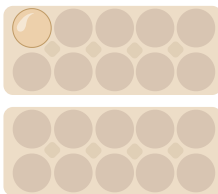
12 6 **11** 14

9.




15 8 **14** 20

10.



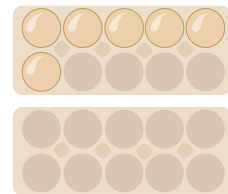
1 8 3 2

11.




19 **0** 3 11

12.



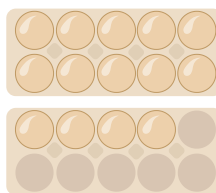
12 17 **6** 20

13.



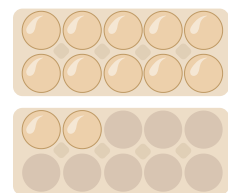
0 17 9 16

14.



2 8 **14** 11

15.



14 **12** 3 5