

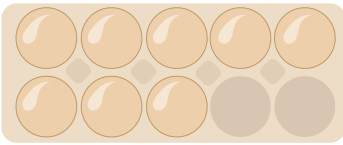


Wie viele Eier zählst du im Eierkarton?




Mengen

1.



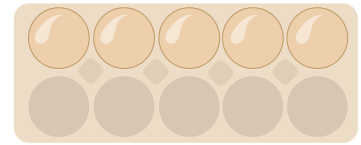
1 8 5 3

2.



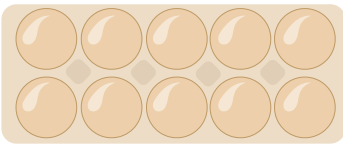
6 10 1 0

3.




8 0 5 9

4.




1 7 8 10

5.



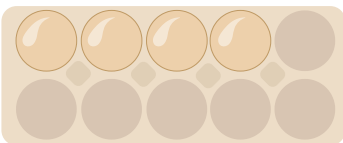
6 7 0 10

6.



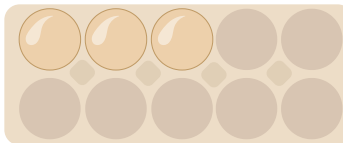
3 1 2 9

7.



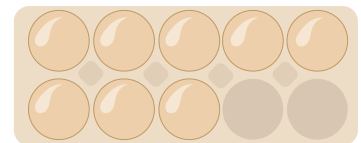
2 4 6 10

8.



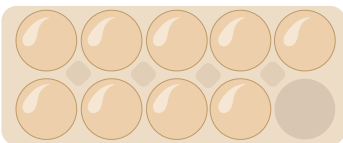
3 2 7 10

9.



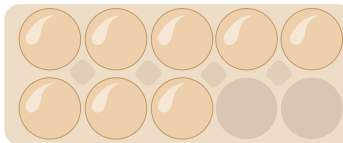
2 3 8 9

10.



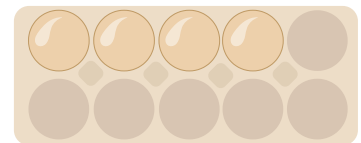
9 7 5 8

11.



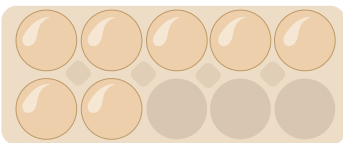
4 9 6 8

12.




6 4 5 3

13.



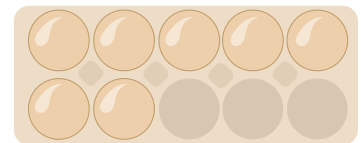
7 5 2 8

14.



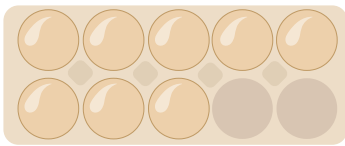
3 2 1 10

15.




0 3 7 5

1.



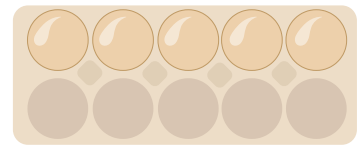
1 8 5 3

2.



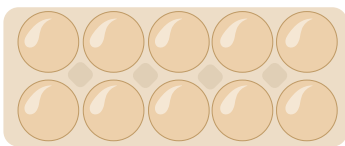
6 10 1 0

3.




8 0 5 9

4.




1 7 8 10

5.



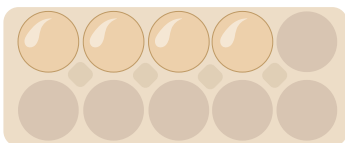
6 7 0 10

6.



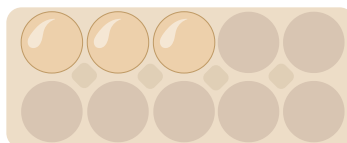
3 1 2 9

7.



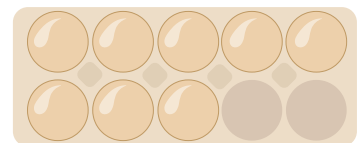
2 4 6 10

8.




3 2 7 10

9.




2 3 8 9

10.



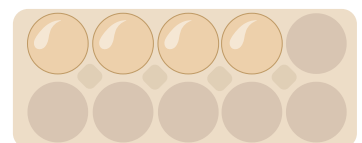
9 7 5 8

11.



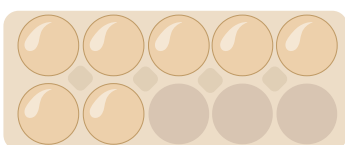
4 9 6 8

12.




6 4 5 3

13.



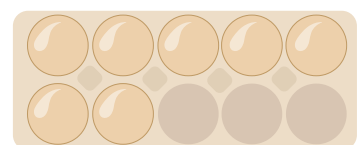
7 5 2 8

14.



3 2 1 10

15.



0 3 7 5