

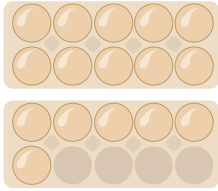


# Wie viele Eier zählst du?



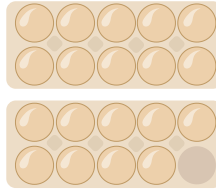
Mengen

1.




.....

2.



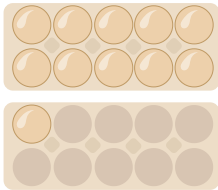
.....

3.



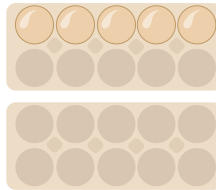
.....

4.




.....

5.



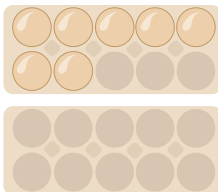
.....

6.



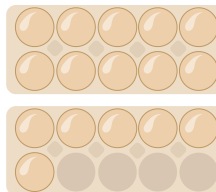
.....

7.



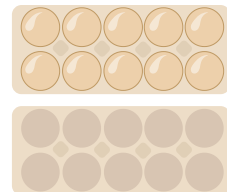
.....

8.



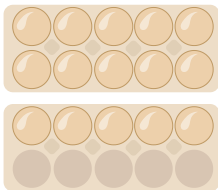
.....

9.



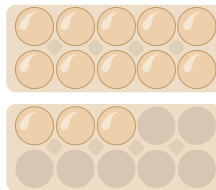
.....

10.




.....

11.




.....

12.



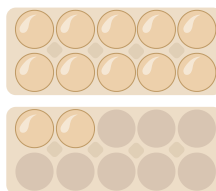
.....

13.



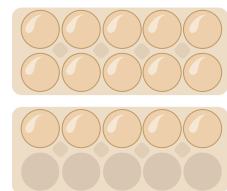
.....

14.



.....

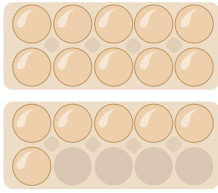
15.



.....

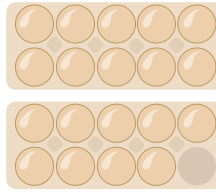


1.




16

2.



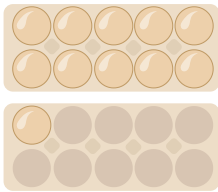
19

3.



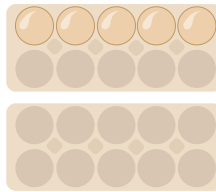
20

4.




11

5.



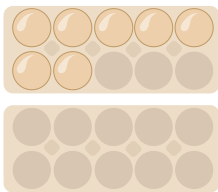
5

6.



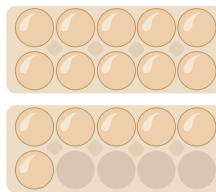
0

7.



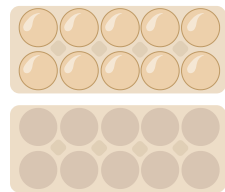
7

8.



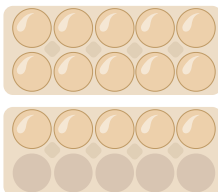
16

9.



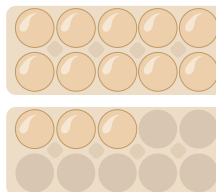
10

10.




15

11.



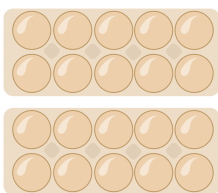
13

12.



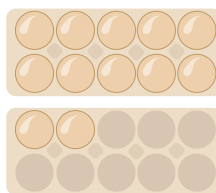
0

13.



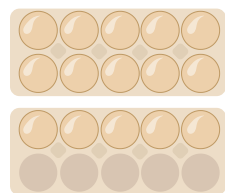
20

14.



12

15.



15