

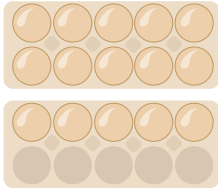


# Wie viele Eier zählst du?



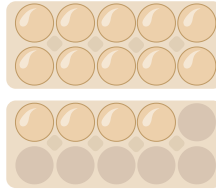
Mengen

1.



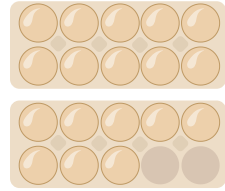
.....

2.




.....

3.



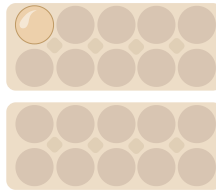
.....

4.



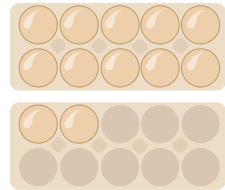
.....

5.




.....

6.



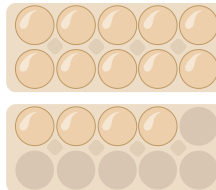
.....

7.



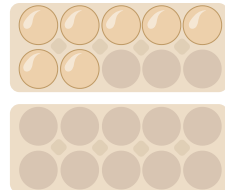
.....

8.



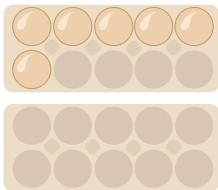
.....

9.



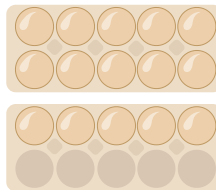
.....

10.



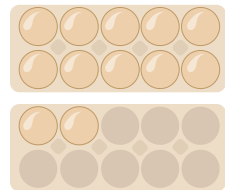
.....

11.



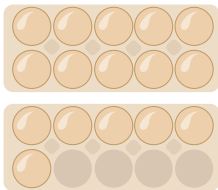
.....

12.



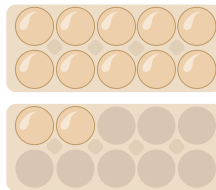
.....

13.



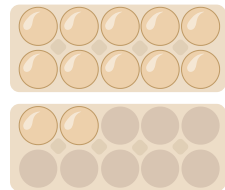
.....

14.



.....

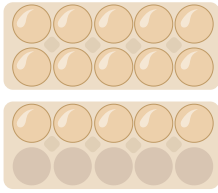
15.



.....

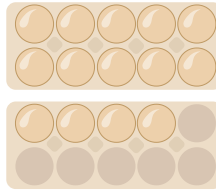


1.



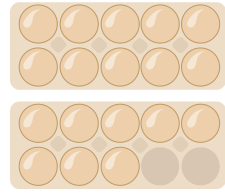
15

2.




14

3.



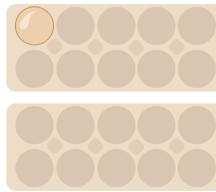
18

4.



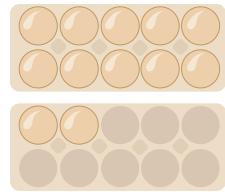
20

5.




1

6.



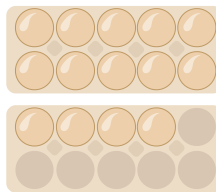
12

7.



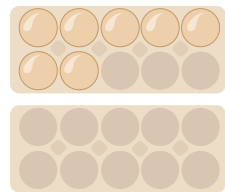
20

8.



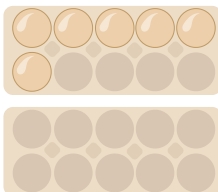
14

9.



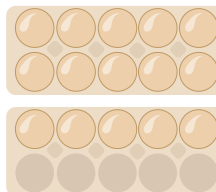
7

10.



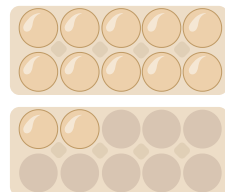
6

11.



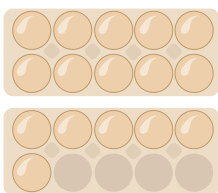
15

12.



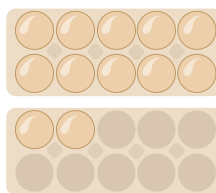
12

13.



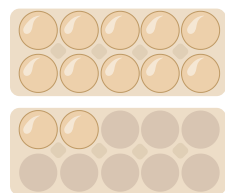
16

14.



12

15.



12