

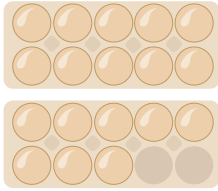


# Wie viele Eier zählst du?



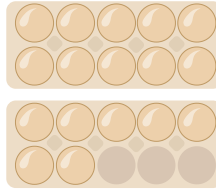
Mengen

1.



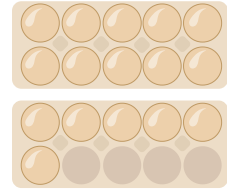
.....

2.



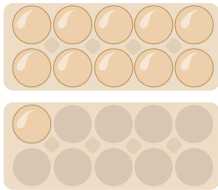
.....

3.



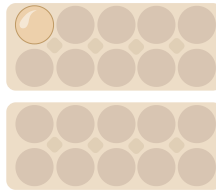
.....

4.



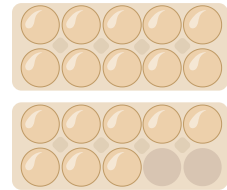
.....

5.



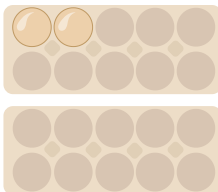
.....

6.



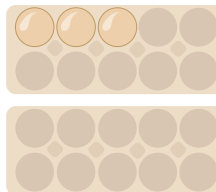
.....

7.



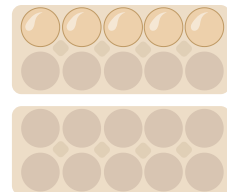
.....

8.



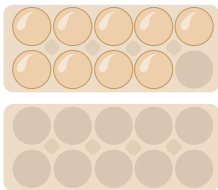
.....

9.



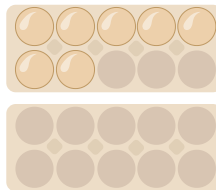
.....

10.



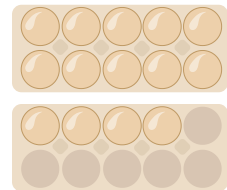
.....

11.



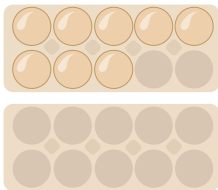
.....

12.



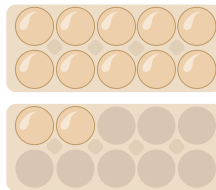
.....

13.



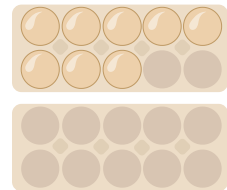
.....

14.



.....

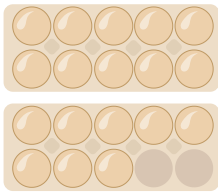
15.



.....

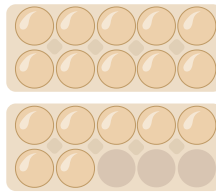


1.



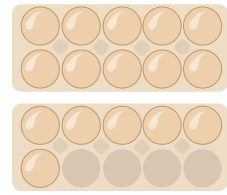
18

2.



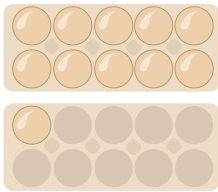
17

3.



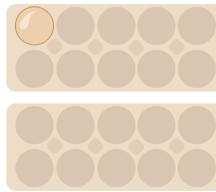
16

4.



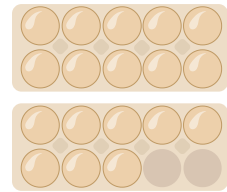
11

5.



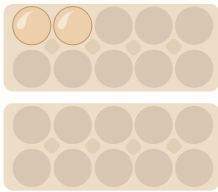
1

6.



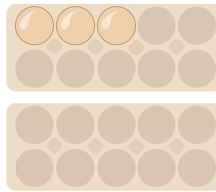
18

7.



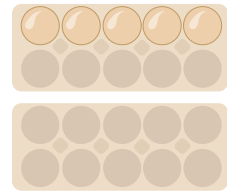
2

8.




3

9.



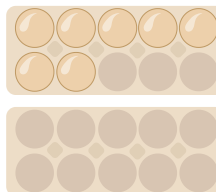
5

10.



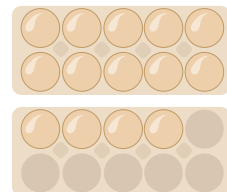
9

11.



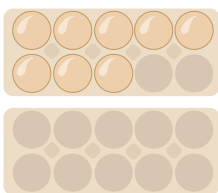
7

12.



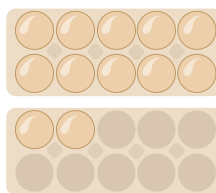
14

13.



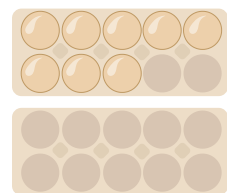
8

14.



12

15.



8