




Welche Zahl siehst du?




Mengen

1.




7 6 3 5

2.




3 10 0 4

3.



0 10 5 6

4.




2 5 4 6

5.



0 2 6 5

6.




8 5 2 10

7.



2 0 9 1

8.



7 10 5 6

9.



3 5 9 7

10.



4 2 0 2

11.




10 7 0 4

12.




0 3 0 10

1.




7 6 3 5

2.




3 10 0 4

3.




0 10 5 6

4.




2 5 4 6

5.



0 2 6 5

6.




8 5 2 10

7.




2 0 9 1

8.



7 10 5 6

9.



3 5 9 7

10.



4 6 0 2

11.



10 7 0 6

12.



0 2 6 10