




# Welche Zahl siehst du?




Mengen

1.




7 0 6 5

2.




2 9 7 1

3.




8 1 5 7

4.




5 9 8 7

5.




6 4 2 5

6.




8 4 5 0

7.



4 10 5 6

8.




3 7 5 9

9.




6 7 0 10

10.




5 4 0 5

11.




5 4 0 5

12.




4 0 1 4

1.




7 0 6 5

2.




2 9 7 1

3.




8 1 5 7

4.




5 9 8 7

5.




6 4 2 5

6.




8 4 5 0

7.



4 10 5 6

8.




3 7 5 9

9.




6 7 0 10

10.




2 4 0 5

11.



5 4 0 0

12.



4 0 1 5