

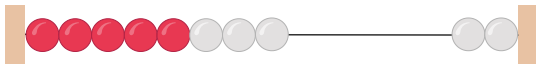


# Übungsblatt: Wie viele Perlen zählst du?



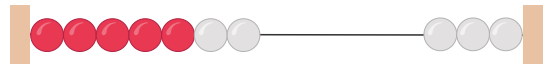
Mengen

1.




7 8 6 3

2.




2 8 6 7

3.



8 5 6 0

4.



8 4 6 5

5.



7 0 9 3

6.



10 9 4 1

7.



1 6 8 2

8.



3 10 8 4

9.



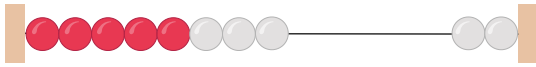
4 7 6 1

10.



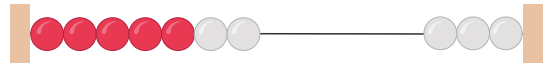
1 5 6 10

1.



7 8 6 3

2.



2 8 6 7

3.



8 5 6 0

4.



8 4 6 5

5.



7 0 9 3

6.



10 9 4 1

7.




1 6 8 2

8.



3 10 8 4

9.



4 7 6 1

10.



1 5 6 10