



# Übungsblatt: Wie viele Perlen zählst du?




Mengen

1.



9 7 3 1

2.



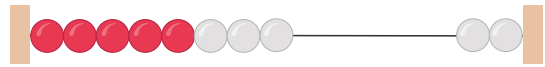
2 3 8 9

3.



6 0 1 9

4.



9 8 10 7

5.



1 7 10 0

6.



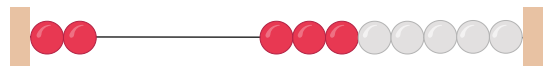
3 1 9 4

7.



10 4 0 3

8.



8 2 0 3

9.



6 1 10 5

10.



8 10 6 2



1.



- 9 7 3 1

2.



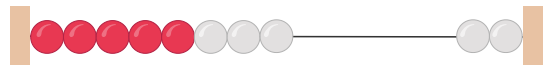
- 2 3 8 9

3.



- 6 0 1 9

4.



- 9 8 10 7

5.



- 1 7 10 0

6.



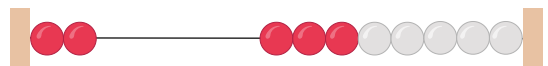
- 3 1 9 4

7.



- 10 4 0 3

8.



- 8 2 0 3

9.



- 6 1 10 5

10.



- 8 10 6 2