



# Wie viele Perlen zählst du?




Mengen

1.



1 6 9 8

2.



4 7 8 5

3.



7 0 6 1

4.



5 4 6 3

5.



10 7 9 4

6.



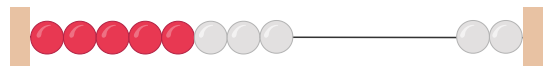
3 6 7 9

7.



8 4 1 9

8.



6 8 3 10

9.



8 7 4 5

10.



7 3 1 2




1.



1 6 9 8

2.



4 7 8 5

3.



7 0 6 1

4.



5 4 6 3

5.



10 7 9 4

6.



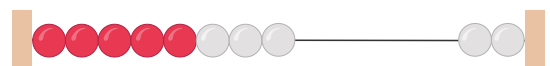
3 6 7 9

7.



8 4 1 9

8.



6 8 3 10

9.



8 7 4 5

10.



7 3 1 2