



# Übungsblatt: Wie viele Perlen zählst du?



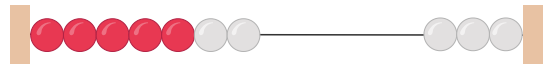
Mengen

1.



.....

2.




.....

3.



.....

4.



.....

5.



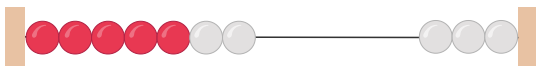
.....

6.



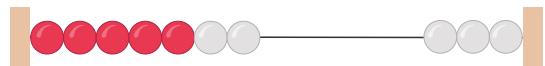
.....

7.



.....

8.



.....

9.



.....

10.



.....

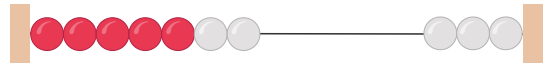


1.



3

2.



7

3.



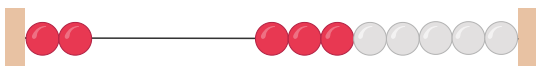
10

4.



6

5.



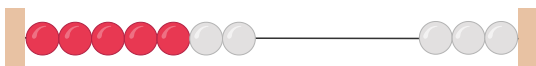
2

6.



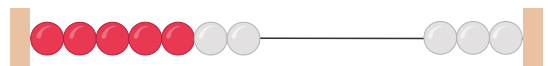
6

7.



7

8.



7

9.



2

10.



1