



Übungsblatt: Wie viele Perlen zählst du?




Mengen

1.



.....

2.



.....

3.



.....

4.



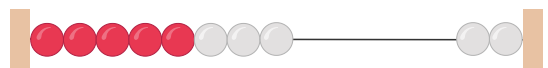
.....

5.



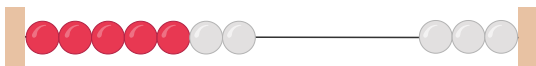
.....

6.



.....

7.



.....

8.



.....

9.



.....

10.



.....




1.



9

2.



4

3.



9

4.



1

5.



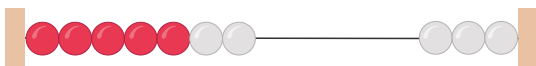
4

6.



8

7.



7

8.



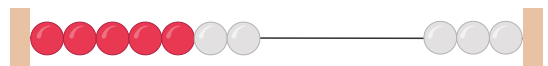
9

9.



10

10.



7