

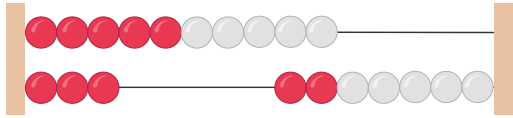


# Welche Zahl zeigt der Rechenrahmen?



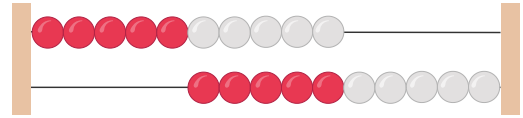
Mengen

1.



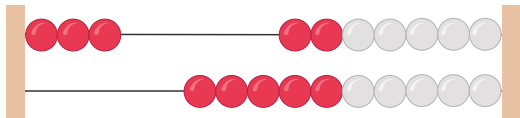
.....

2.



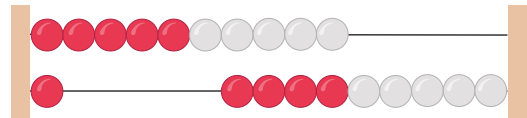
.....

3.




.....

4.



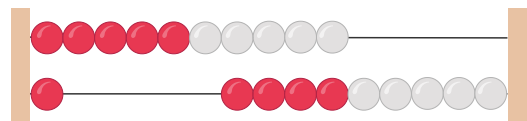
.....

5.



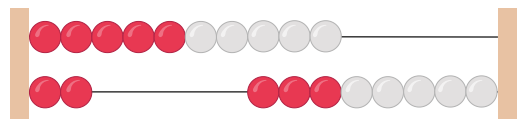
.....

6.



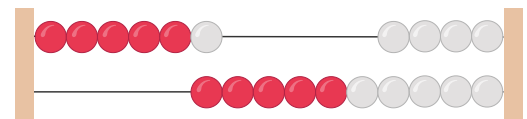
.....

7.



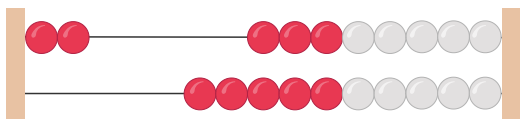
.....

8.



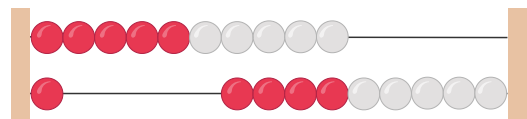
.....

9.



.....

10.



.....



1.   
**13**
2.   
**10**
3.   
**3**
4.   
**11**
5.   
**20**
6.   
**11**
7.   
**12**
8.   
**6**
9.   
**2**
10.   
**11**