




Wie viele Perlen zählst du?




Mengen

1.



.....

2.



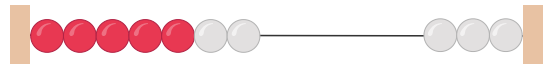
.....

3.



.....

4.



.....

5.



.....

6.



.....

7.



.....

8.



.....

9.



.....


10.



.....




1.



5

2.



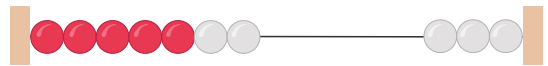
6

3.



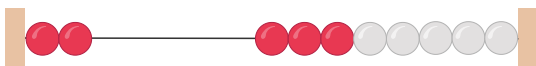
0

4.



7

5.



2

6.



2

7.



1

8.




1

9.



9

10.



5