



# Wie viele Perlen zählst du?



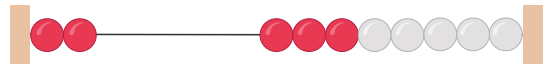
Mengen

1.



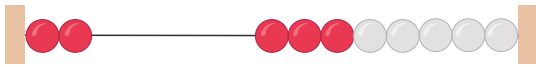
.....

2.



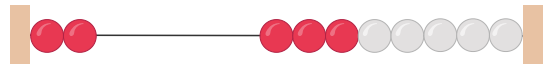
.....

3.



.....

4.



.....

5.



.....

6.



.....

7.



.....

8.



.....

9.



.....

10.



.....

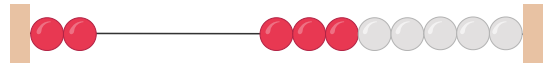


1.



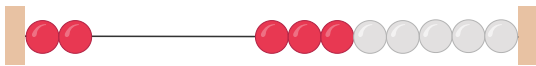
1

2.



2

3.



2

4.



2

5.



9

6.



5

7.



6

8.



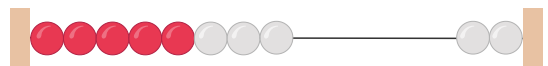
5

9.



2

10.



8